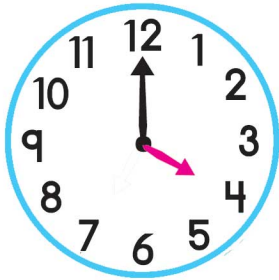
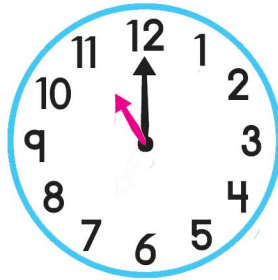


DINO TIME

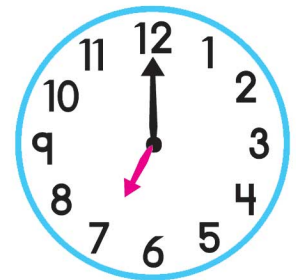
Can you read what does the clock say? Guess the time and write it in the space given below.



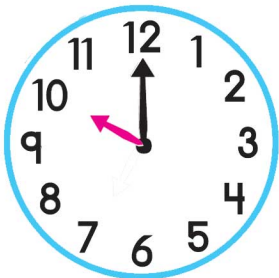
_____ :00



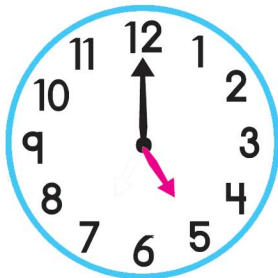
_____ :00



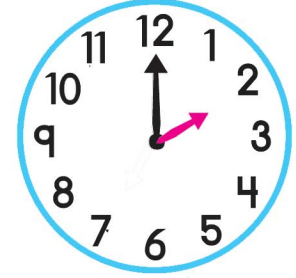
_____ :00



_____ :00



_____ :00



_____ :00



Circle the clock that shows 2:00. Make the clock hands in dino clock so that it shows 2:00.