

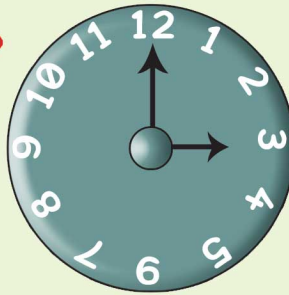


MINUTE HAND HOUR HAND

- Dhaval is teaching his sister how to read time in a clock. He wrote the time on cards and asked her to match the cards with the clock. Can you help his sister find the right matches.




When the minute hand is on 6 and the hour hand is on 12.



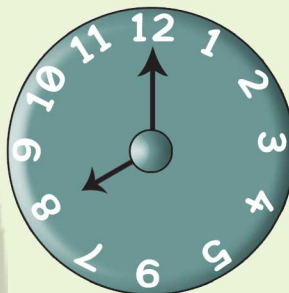
When the minute hand is on 12 and the hour hand is on 8

When the minute hand is on 6 and the hour hand is on 4



When the time is 3 in the afternoon

When the minute hand is on 6 and the hour hand is on 10



When the time is 3 in the afternoon

